



Name _____

Adding Money


Add the coins. Write your answer in the space provided.

1.  = _____ ¢

2.  = _____ ¢

3.  = _____ ¢

4.  = _____ ¢

5.  = _____ ¢

6.  = _____ ¢

7.  = _____ ¢

Name _____