



Name \_\_\_\_\_



# Counting Coins

Complete the tables.

## Counting nickels (5-cent coins)

		Nickels	1	2	3	4	5	6	7	8
		Value:	5¢	10¢				30¢		



## Counting pennies (1-cent coins)

		1	2	4	6	8	10	15	20	25	30
		1¢					10¢				

## Counting dimes (10-cent coins)

		1	2	4	6	8	10	12	14	16
		10¢					1\$			

## Counting quarters (25-cent coins)

		1	2	3	4	5	7	10	12
		25¢				1\$25¢			